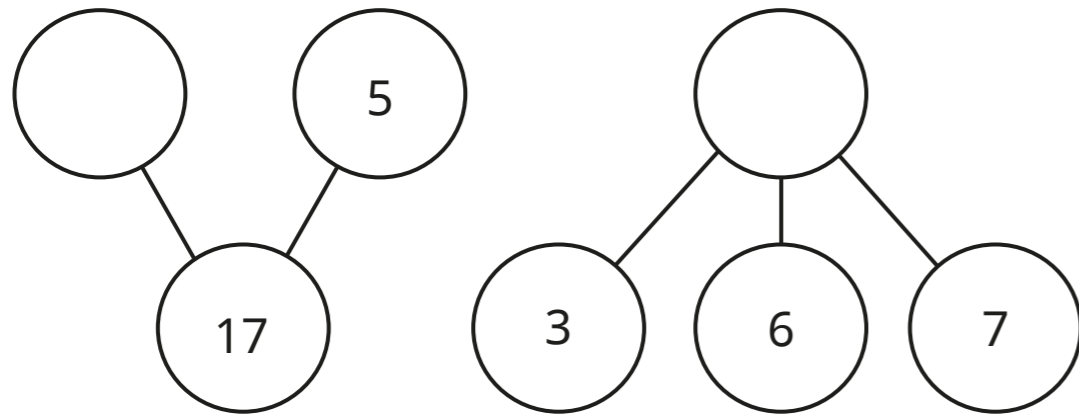


Addition and subtraction

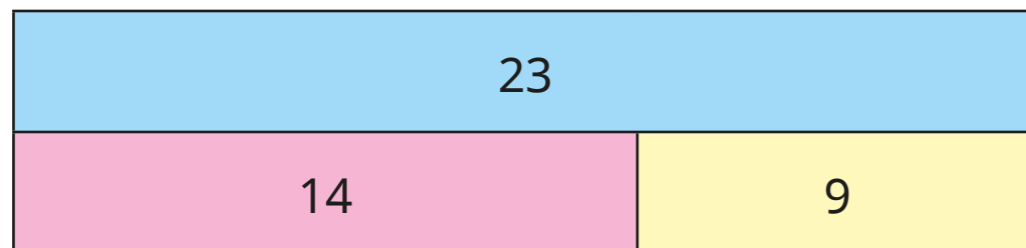
Name: _____

1 Complete the part-whole models.



2 marks

2 Use the bar model to complete the number sentences.



$$9 + \square = 23$$

$$\square - \square = 14$$

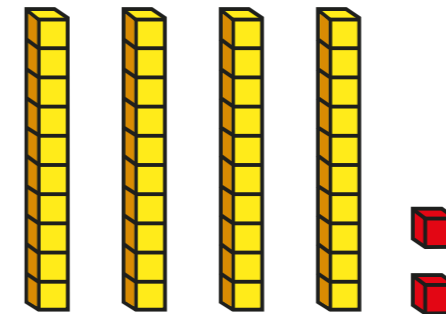
2 marks

3 Complete the table.

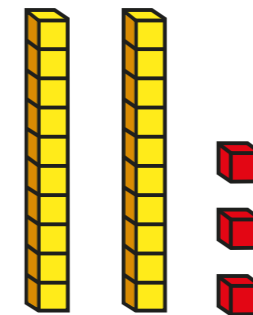
10 less	Number	10 more
5	15	

2 marks

4 Max makes this number.



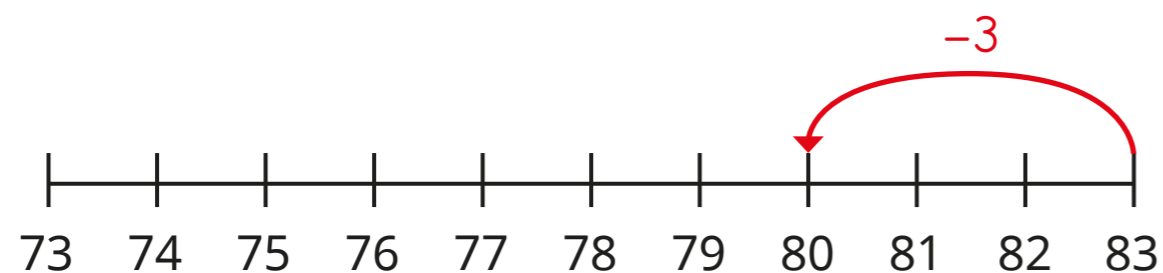
Jo makes this number.



What is the total of their numbers?

1 mark

- 5 Ron is using a number line to work out $83 - 7$



Finish Ron's workings.

1 mark

- 6 Circle two numbers that total **100**

34 44 56 66 76

1 mark

- 7 Dan has 35 grapes.
He eats 14 grapes.
How many grapes are left?

1 mark

- 8 Here are three digit cards.



Use the cards to complete the number sentence in two different ways.

$$\square + \square \square = 64$$

$$\square + \square \square = 64$$

2 marks